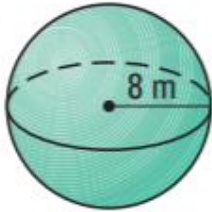


Spheres Practice

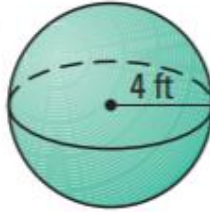
Name: _____

Find the volume of each Sphere. Your answers for 23-25 should be Exact. Your answers for 26-28 should be rounded to the nearest tenth.

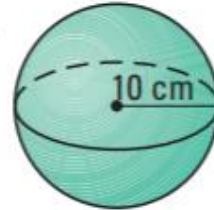
23.



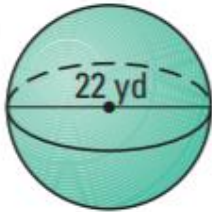
24.



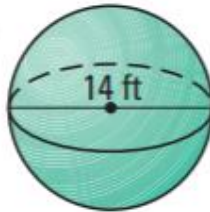
25.



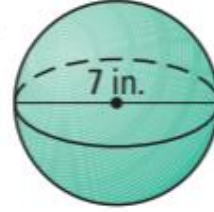
26.



27.

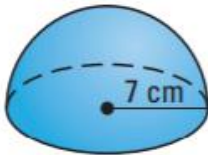


28.

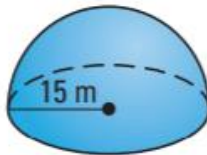


Find the volume of each hemisphere. For 37 and 38, round to the nearest 10th. For 39, your answer should be exact.

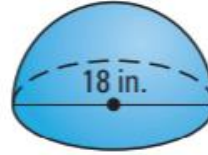
37.



38.

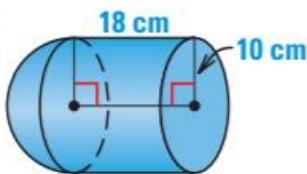


39.

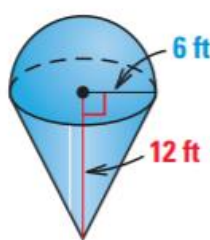


Find the volume of each solid, rounded to the nearest 10th. 42 has a hollow hemisphere on the top.

40.



41.



42.

