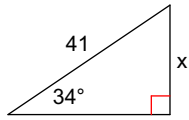


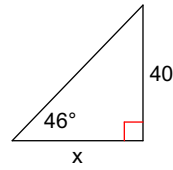
Missing Side Lengths Practice

Find the missing side. Round to the nearest tenth.

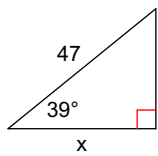
1)



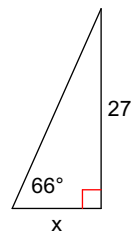
2)



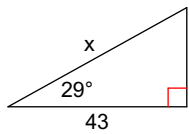
3)



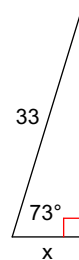
4)



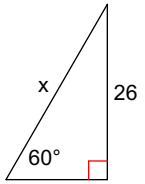
5)



6)



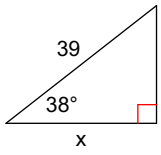
7)



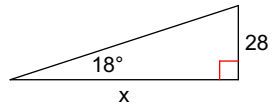
8)



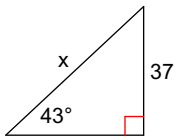
9)



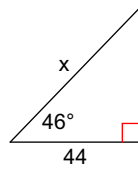
10)



11)



12)



13)



14)

