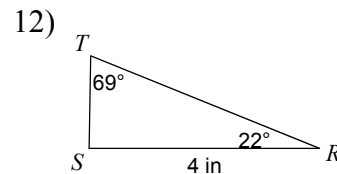
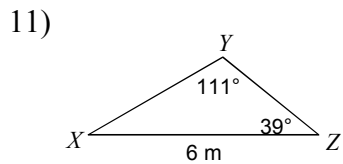
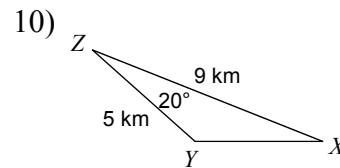
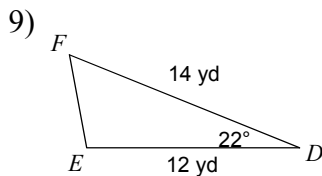
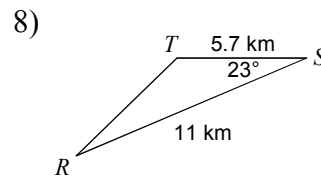
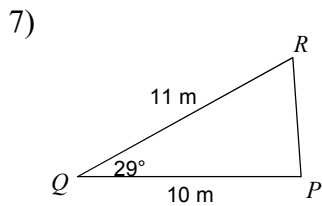
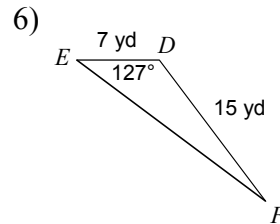
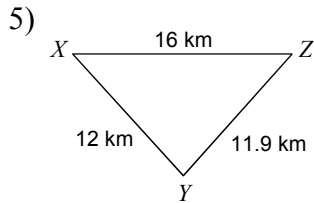
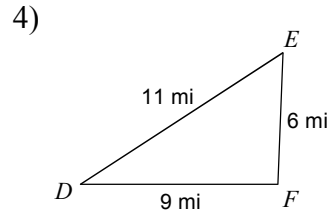
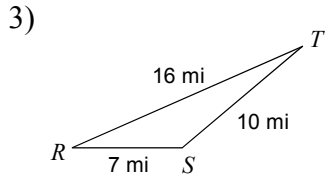
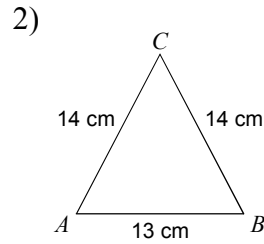
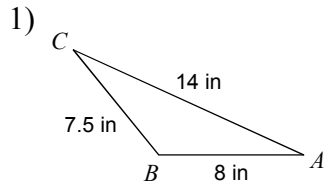


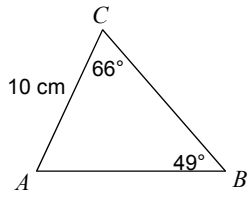
Assignment on Heron's Formula and Trigonometry

© 2013 Kuta Software LLC. All rights reserved.

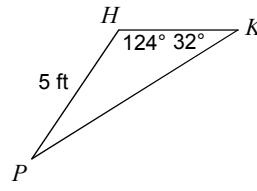
Find the area of each triangle to the nearest tenth.



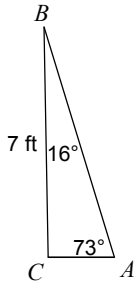
13)



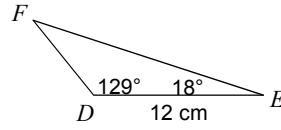
14)



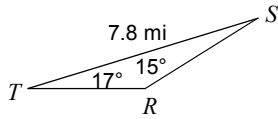
15)



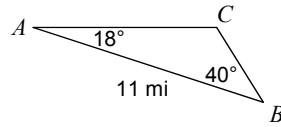
16)



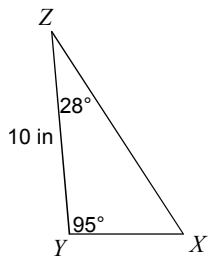
17)



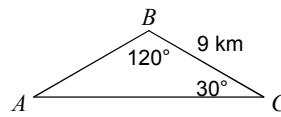
18)



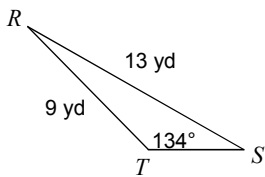
19)



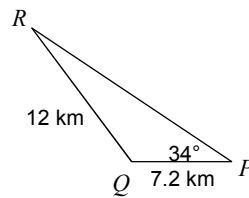
20)



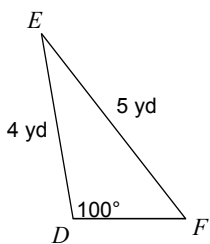
21)



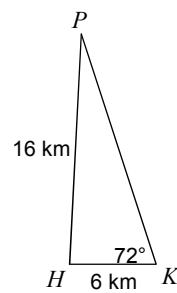
22)



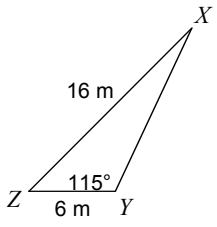
23)



24)



25)



Answers to Assignment on Heron's Formula and Trigonometry (ID: 1)

- | | | | |
|--------------------------|--------------------------|--------------------------|--------------------------|
| 1) 23.3 in ² | 2) 80.6 cm ² | 3) 22.6 mi ² | 4) 27 mi ² |
| 5) 71 km ² | 6) 41.9 yd ² | 7) 26.7 m ² | 8) 12.2 km ² |
| 9) 31.5 yd ² | 10) 7.7 km ² | 11) 6 m ² | 12) 3.2 in ² |
| 13) 54.8 cm ² | 14) 7.9 ft ² | 15) 7 ft ² | 16) 31.7 cm ² |
| 17) 4.3 mi ² | 18) 14.1 mi ² | 19) 27.9 in ² | 20) 35.1 km ² |
| 21) 16.2 yd ² | 22) 34.8 km ² | 23) 4.7 yd ² | 24) 47.9 km ² |
| 25) 34 m ² | | | |