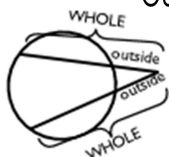


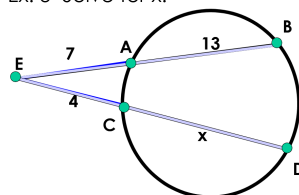
2-Secants and Tangents

October 18, 2020

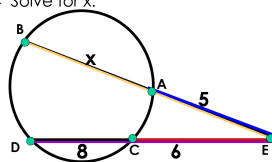
Type 2: Two secants intersect OUTSIDE the circle



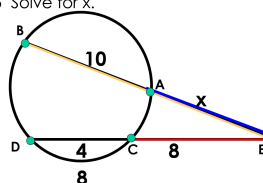
Ex: 3 Solve for x .



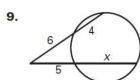
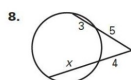
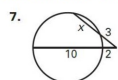
Ex: 4 Solve for x .



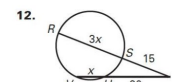
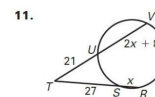
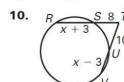
Ex: 5 Solve for x .



Find the value of x .



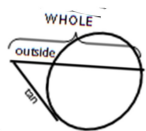
Find RT and TV .



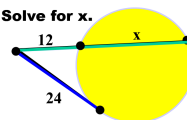
2-Secants and Tangents

October 18, 2020

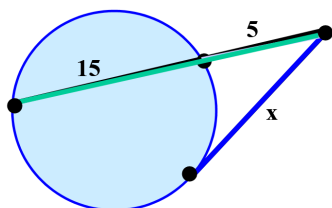
Type 2 (with a twist): Secant and Tangent



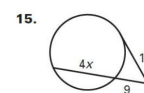
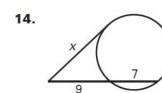
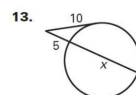
Ex: 5 Solve for x .



Ex: 6



Find the value of x .



Find PQ .

