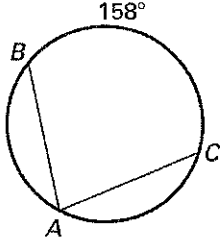


LESSON
6.4

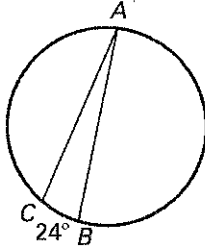
Practice

Find the indicated measure.

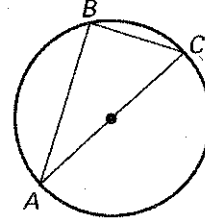
1. $m\angle A$



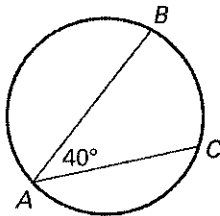
2. $m\angle A$



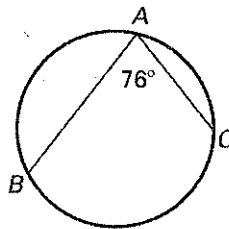
3. $m\angle B$



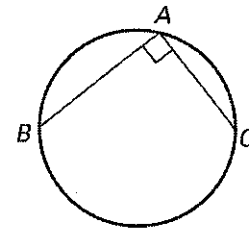
4. $m\widehat{BC}$



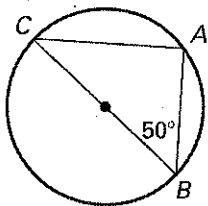
5. $m\widehat{BC}$



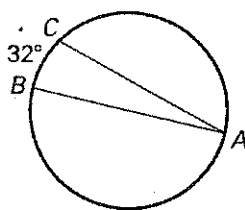
6. $m\widehat{BC}$



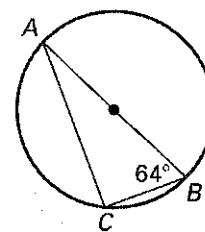
7. $m\angle C$



8. $m\angle A$



9. $m\widehat{BC}$



LESSON
6.4**Practice** *continued*Find the indicated measure in $\odot M$.

10. $m\angle PNO$

11. $m\angle QNP$

12. $m\widehat{PQ}$

13. $m\widehat{QO}$

14. $m\angle NMO$

15. $m\widehat{NOP}$

16. $m\angle QMP$

17. $m\widehat{OQN}$

